



Question #:

Your answer is:

#1. $2 - 1 =$



=

#2. $3 - 1 =$



=

#3. $4 - 2 =$



=

#4. $4 - 3 =$



=

(Optional: Educators please log in the reward points online)

Reward =

/4

Question #:

Your answer is:



#5. $5 - 1 =$



=

#6. $5 - 2 =$



=

#7. $5 - 3 =$



=

#8. $6 - 4 =$







=

(Optional: Educators please log in the reward points online)

Reward =

/4



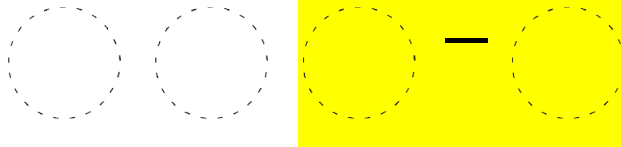
| Question #: | Your answer is: |
|--|---|
| #9. $7 - 2 =$ |  = |
| #10. $7 - 3 =$ |  = |
| #11. $7 - 4 =$ |  = |
| #12. $8 - 5 =$ |  = |
| <p><i>(Optional: Educators please log in the reward points online)</i></p> <p>Reward =</p> | <p style="text-align: right;">/4</p> |



Question #:


Draw out your answer:

#13. $3 - 1 =$



=

#14. $4 - 2 =$



=

#15. $5 - 3 =$



=

#16. $6 - 2 =$



=

(Optional: Educators please log in the reward points online)

Reward =

/4



#17. $3 - 2 =$

#18. $4 - 2 =$

#19. $5 - 2 =$

#20. $6 - 2 =$

#21. $4 - 3 =$

#22. $5 - 3 =$

#23. $6 - 2 =$

#24. $6 - 5 =$

#25. $7 - 4 =$

#26. $7 - 2 =$

#27. $8 - 5 =$

#28. $8 - 6 =$

#29. $9 - 4 =$

#30. $9 - 3 =$

*(Optional: Educators
please log in the reward
points online)*

Reward =

/14