




Question #:


Your answer is:

#1.  $1 + 3 =$




=

#2.  $3 + 1 =$




=

#3.  $4 + 1 =$



=

#4.  $1 + 4 =$



=

(Optional: Educators  
please log in the reward  
points online)

Reward =


/4



Question #:


Your answer is:

#5.  $2 + 3 =$



=

#6.  $3 + 3 =$



=

#7.  $4 + 2 =$



=

#8.  $2 + 4 =$



=

(Optional: Educators  
please log in the reward  
points online)

Reward =

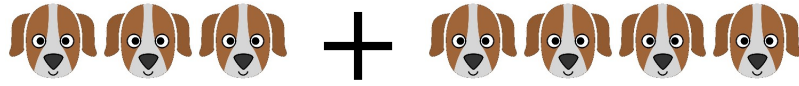
/4



Question #:

Your answer is:

#9.  $3 + 4 =$



=

#10.  $4 + 3 =$



=

#11.  $2 + 5 =$



=

#12.  $3 + 5 =$



=

(Optional: Educators  
please log in the reward  
points online)

Reward =

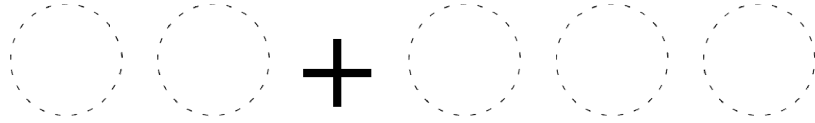
/4



Question #:

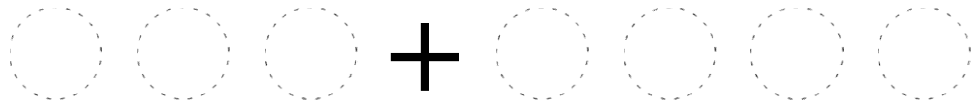
Draw out your answer:

#13.  $2 + 3 =$



=

#14.  $3 + 4 =$



=

#15.  $4 + 2 =$



=

#16.  $2 + 5 =$



=

(Optional: Educators  
please log in the reward  
points online)

Reward =

**/4**



#17.  $3 + 2 =$

#18.  $3 + 3 =$

#19.  $1 + 5 =$

#20.  $6 + 1 =$

#21.  $4 + 1 =$

#22.  $4 + 3 =$

#23.  $4 + 2 =$

#24.  $4 + 5 =$

#25.  $1 + 7 =$

#26.  $2 + 7 =$

#27.  $3 + 5 =$

#28.  $2 + 8 =$

#29.  $6 + 4 =$

#30.  $5 + 5 =$

*(Optional: Educators  
please log in the reward  
points online)*

Reward =

**/14**